

1. Solve the following inequality.

$$24 < -2(x-3) < 36$$

- A. $-16 < x < -15$
- B. $-21 < x < -9$
- C. $-21 < x < -15$
- D.** $-15 < x < -9$

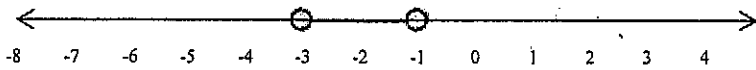

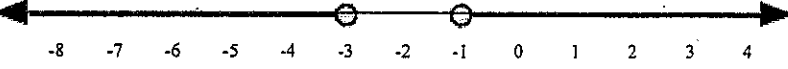

2. Solve the following inequality.

$$|3x + 4| < 8$$

- A. $x < \frac{4}{3}$
- B. $-\frac{4}{3} < x < 4$
- C.** $-4 < x < \frac{4}{3}$
- D. $-8 < x < \frac{4}{3}$

3. Which of the following graphs shows the solution set for the inequality below?

$$|2x + 4| > 2$$

- A. 
- B. 
- C.** 
- D. 

4. Tom can spend up to \$40 for gasoline and a carwash at a service station. The carwash will cost \$6.00, and a gasoline costs \$4.50 per gallon. The inequality below can be solved for g , the number of gallons of gasoline Tom can buy.

$$4.5g + 6 \leq 40$$

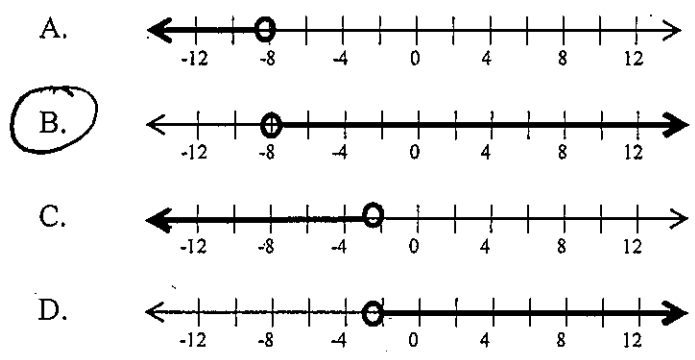
$$4.5g \leq 34$$
$$g \leq 7.56$$

Which of the following is a true statement?

- A. Tom can buy over **10** gallons of gasoline.
- B. Tom can buy at most 7 gallons of gasoline
- C. Tom can buy 6 gallons, but not 7 gallons.
- D.** Tom can buy 7 gallons of gasoline, but not 8 gallons.

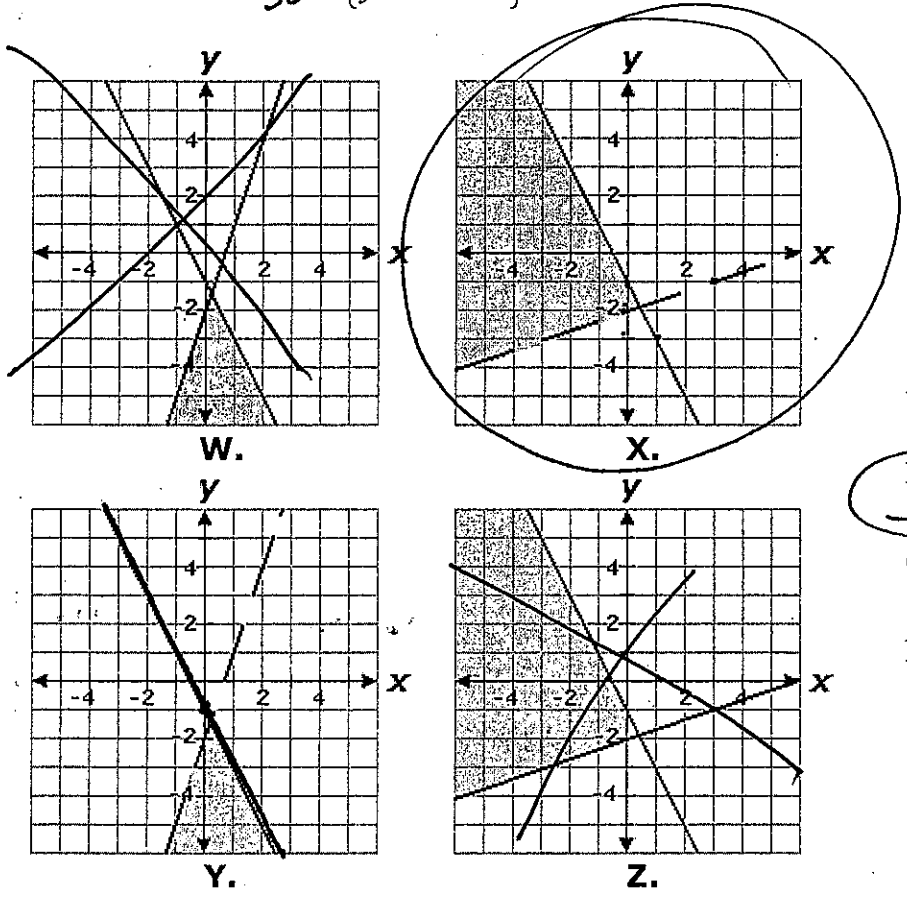
5. Which of the following graphs shows the solution to the inequality $-\frac{1}{2}x - 4 < 0$?

$-\frac{1}{2}x < 4$
 $x > -8$



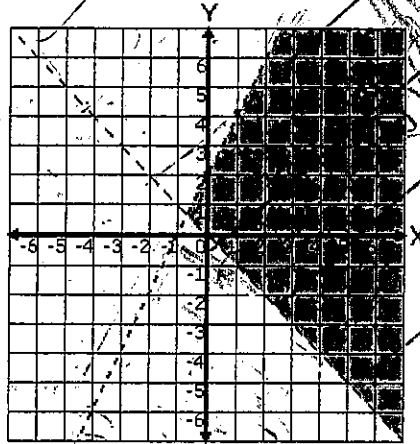
6. Which graph represents the following system of inequalities?

dashed $y > \frac{1}{3}x - 2$
Solid $y \leq -2x - 1$



- A. Y
- B. X**
- C. W
- D. Z

7. Choose the system of inequalities that best matches the graph below.



A. $y < 2x + 2$
 $y < x$

~~B. $y \leq x - 2$
 $y > -x$~~

~~C. $y < 2x$
 $y \leq x$~~

D. $y < 2x + 2$
 $y > -x$

8. At an ice-cream parlor, ice-cream cones cost x dollars each and sundaes cost y dollars each. The total cost of 4 cones and 3 sundaes is more than \$20. The total cost of 5 cones and 1 sundae is less than \$16. This situation can be represented by which of the following system of inequalities:

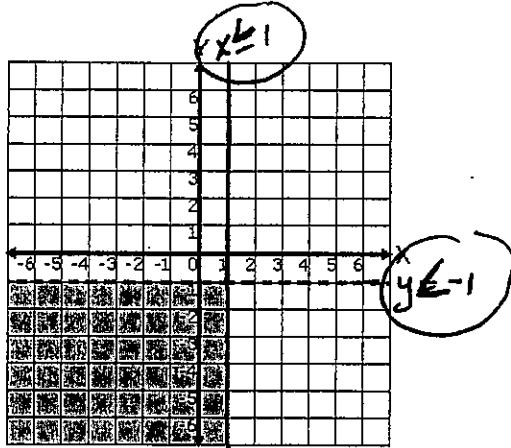
A. $4x + 3y > 20$
 $5x + y < 16$

B. $4x + 3y < 20$
 $5x + y > 16$

C. $4x + 3y \geq 20$
 $5x + y \leq 16$

D. $4x + 3y \leq 20$
 $5x + y \leq 16$

9. Choose the system of inequalities that best matches the graph below.



A. $y < -1$
 $x \leq 1$

B. $y \leq -1$
 $x < 1$

C. $y < 1$
 $x \leq -1$

D. $y > -1$
 $x \geq 1$

10. Blade-Z manufactures roller blades. The production facility has fixed costs of \$300 a day and total production costs of \$3,300 per day at an output of 100 pair of skates per day. Which of the following equations represents the daily production cost for Blade-Z based on the number of skates manufactured?

(Let $C(x)$ represent the daily production cost and x represent the number of pairs of skates manufactured.)

A. $C(x) = 33x + 300$

B. $C(x) = 30x - 300$

C. $C(x) = 30x + 300$

D. $C(x) = 33x$

$(100, 3300)$
 $x_1 \quad y_1$

$\rightarrow y = mx + b$

$\rightarrow y - y_1 = m(x - x_1)$

$C(x) = mx + b$

$3300 = m(100) + 300$
 $-300 \quad -300$

$3000 = m \cdot 100$

$30 = m$

11. Meghan is completing her chemistry and geometry homework. Each chemistry assignment has x problems, and each geometry assignment has y problems. She must complete a total of 81 problems. The equation below describes the relationship between the number of chemistry problems and the number of geometry problems.

$$5x + 3y = 81$$

The ordered pair (x, y) is a solution of the equation. What does the solution $(9, 12)$ represent?

- A. Each chemistry assignment contains 9 problems and each geometry assignment contains 12 problems.
- B. Meghan must complete 3 more geometry assignments than chemistry assignments.
- C. Meghan spent 9 minutes on her chemistry homework and 12 minutes on her geometry homework.
- D. Meghan must complete 9 more chemistry assignments than geometry assignments.

12. A rental car company charges a base fee of \$50.47 plus \$0.50 per mile driven. If x represents the number of miles driven, which of the following equations could be used to find y , the total cost of the bill?

A. $y = \$0.80x + \50.47

B. $y = \$50.47x + \0.50

C. $y = \$50.97x$

D. $y = \$0.50x + \50.47

13. Solve for x. $9x - 5 = 6x + 9x + 10$

$9x - 5 = 6x + 9x + 10$

A. $x = \frac{5}{18}$

C. $x = \frac{5}{2}$

B. $x = -\frac{5}{18}$

D. $x = -\frac{5}{2}$

$9x - 5 = 15x + 10$

$-15 = 6x$

$-\frac{15}{6} = x$

14. The steps John used to solve an equation are shown below.

Solve: $0.4x + 5 + 0.2x = 17$

Step 1: $0.4x + 0.2x + 5 = 17$

Step 2: $0.6x + 5 = 17$

Step 3: $0.6x = 12$

Step 4: $x = 20$

Which properties justify Step 1 and Step 3?

- A. Step 1: Distributive Property
Step 3: Division Property of Equality
- B. Step 1: Distributive Property
Step 3: Subtraction Property of Equality
- C. Step 1: Commutative Property of Equality
Step 3: Division Property of Equality
- D. Step 1: Commutative Property of Addition
Step 3: Subtraction Property of Equality

15. What is a solution to the linear equation $\frac{3}{4}x - 5 = 10$?

A. $x = \frac{15}{4}$

B. $x = \frac{20}{3}$

C. $x = \frac{45}{4}$

D. $x = 20$

16. Which is a correct step in solving the following equation for x?

$-1.75 + 2(2 - x) = 0$

$-1.75 + 4 - 2x = 0$

A. $2(2 - x) = -1.75$

B. $4 - x = 1.75$

C. $-2x = 1.75 - 4$

D. $x = -2.25 \div 2$

$4 - 2x = 1.75$

$-2x = 1.75 - 4$

17. Use elimination to find the solution to the system of equations.

$$\begin{array}{r}
 10 + y = 10 \\
 y = 0 \\
 3[5x + y = 10] \quad 15x + 3y = 30 \\
 2x - 3y = 4 \\
 \hline
 17x = 34 \\
 x = 2
 \end{array}$$

- A. $x = 14, y = 8$
 B. $x = 2, y = 0$
 C. $x = -4, y = 4$
 D. $x = -4, y = 30$

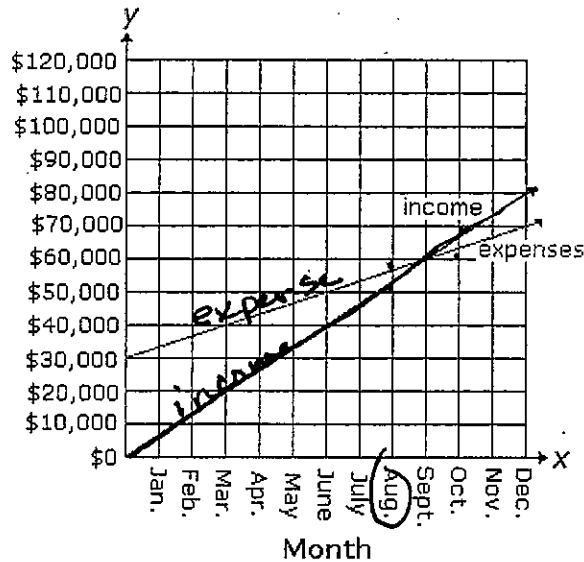
18. Use substitution to solve for x in the system of equations:

Elim.

$$\begin{array}{r}
 11x + 2y = 30 \\
 -2[4x + y = 9] \quad -8x - 2y = -18 \\
 \hline
 3x = 12 \\
 x = 4
 \end{array}$$

- A. $x = 4$
 B. $x = 10$
 C. $x = -4$
 D. $x = 8$

19. The equations representing income and expenses for Tom's candy store are shown in the graph below.



Income: $20,000x - 3y = 0$
 Expenses: $10,000x - 3y + 90,000 = 0$

Let x represent the month and y represent the amount in dollars.
 In which month were the store's expenses greater than its income?

- A. November
 B. September

- C. August
 D. October

Explain

$$x = 2 \quad y = 2$$

- C. On another day, Reid and Sharon each sold 5 shirts and 2 pants.
Who sold the greatest dollar amount of merchandise?

Reid

$$14x + 39y$$

$$148$$

Sharon

$$12x + 44y$$

$$148$$